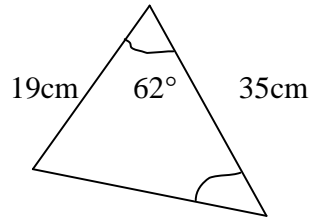


(C2-2.10) Name:

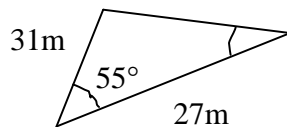
Homework Questions 10 – Area of a Triangle

Find the area of the following triangles, give answers to 1dp. (*The diagrams are not drawn to scale*)

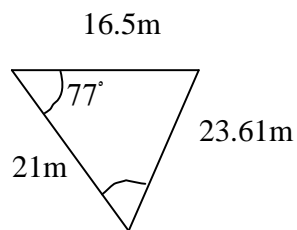
1.



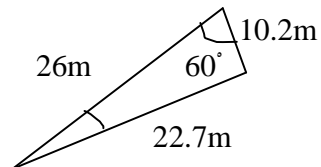
2.



3.



4.



5.

In triangle ABC, $AB = 54\text{m}$, $AC = 43\text{m}$ and $BC = 62\text{m}$.

What is the area of the triangle ABC

6.

In triangle ABC, $AB = 16\text{cm}$, $BC = 16\text{cm}$ and $\angle BCA = 48^\circ$

What is the area of the triangle ABC