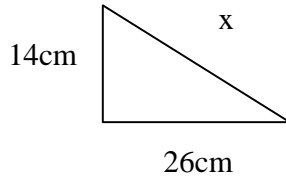


(C2-2.1) Name:

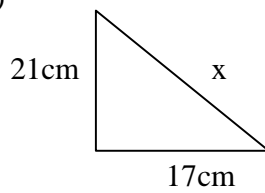
Homework Questions 1 – Pythagoras

Solve the following problems using Pythagoras. You must show all your working out
Give answers to 1 dp (all triangles shown are right angled triangles)

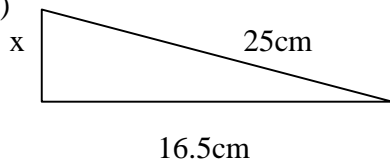
a)



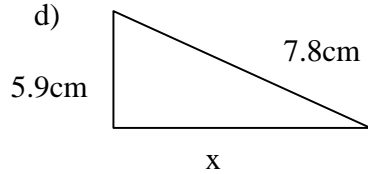
b)



c)



d)



e)

