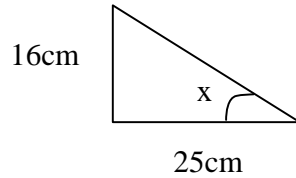


(C2-2.2) Name:

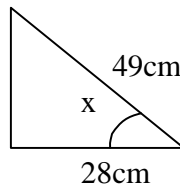
Homework Questions 2 – Trigonometry

Solve the following problems using Trigonometry. You must show all your working out
Give answers to 1dp (all triangles shown are right angled)

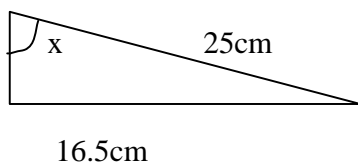
a)



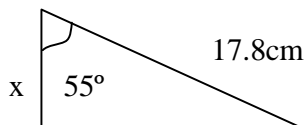
b)



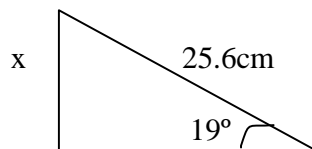
c)



d)



e)



f)

